

Psychology  
PAPER 1

Diagram Booklet

In the boxes below, write your name, centre number and candidate number.

Surname					
Other names					
Centre Number					
Candidate Number					

## INSTRUCTIONS

There may be spare copies of some diagrams in case you need them.

**THIS DIAGRAM BOOKLET MUST BE RETURNED WITH THE QUESTION PAPER AT THE END OF THE EXAMINATION.**

## Contents

### Page

4	Question 5
5	Question 8
6	Question 9
7	Question 10
8	Question 14
9	Question 17
10	Question 17 (Spare copy)
11	Question 20

## Question 5

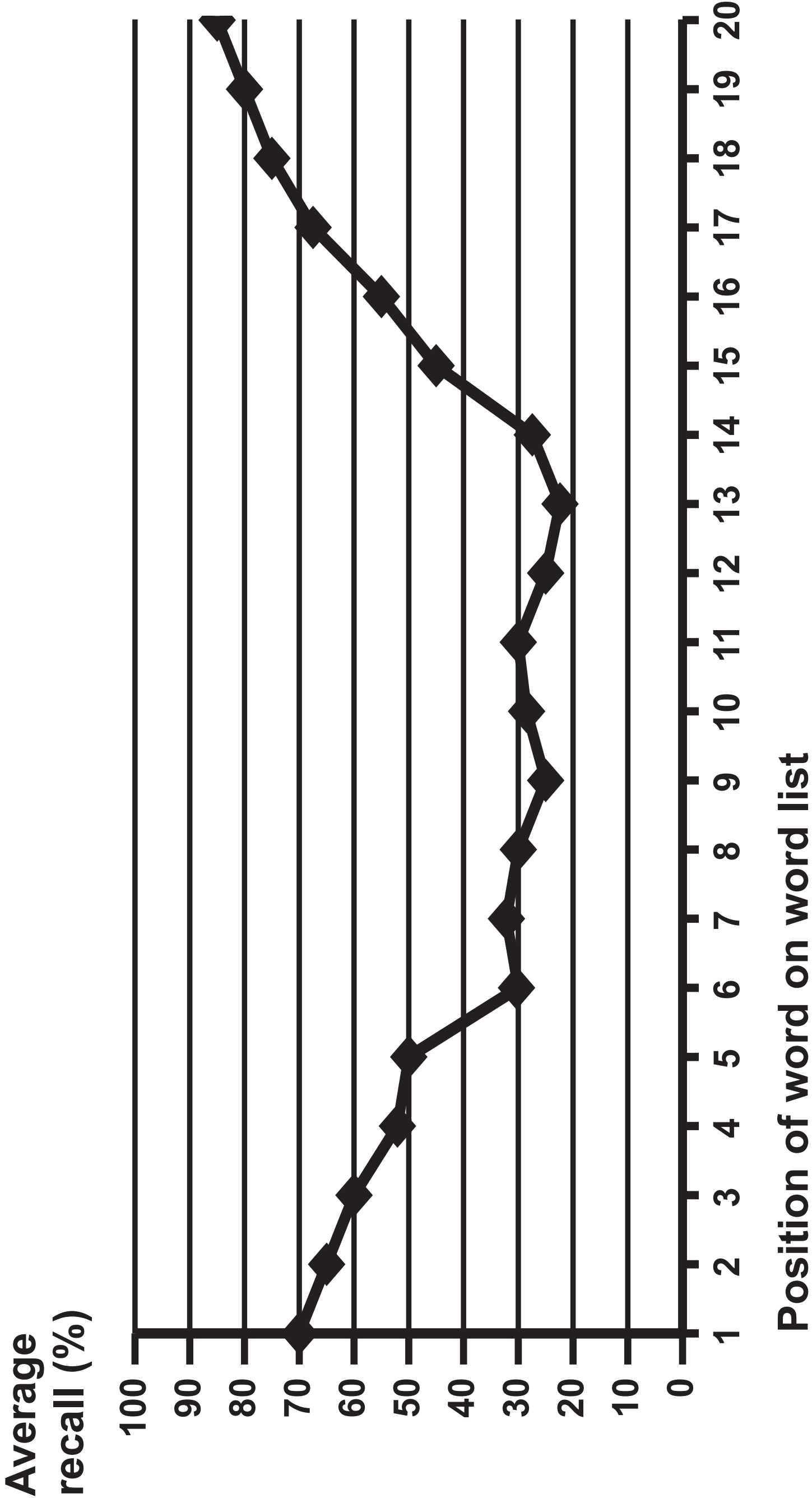
TABLE 1

Supervised by James		Supervised by the other teacher	
Pupil	Ability to share and take turns (1–10)	Pupil	Ability to share and take turns (1–10)
A	8	F	4
B	9	G	5
C	8	H	5
D	7	I	4
E	9	J	6

Question 8

FIGURE 2

A line graph to show the average recall (%) of each word in the word list



## Question 9

FIGURE 3

Nishka's number lists										
Trial 1:	8	1	5	0						
Trial 2:	4	2	3	9	6					
Trial 3:	3	8	1	0	4	5				
Trial 4:	2	7	1	5	6	9	1			
Trial 5:	5	0	2	1	7	3	8	4		
Trial 6:	0	2	9	1	3	0	4	7	5	
Trial 7:	1	6	2	7	8	4	1	3	5	2

## Question 10

TABLE 2

Condition	Percentage (%)
Participants who could read the paragraph	98%
Participants who could not read the paragraph	2%

## Question 14

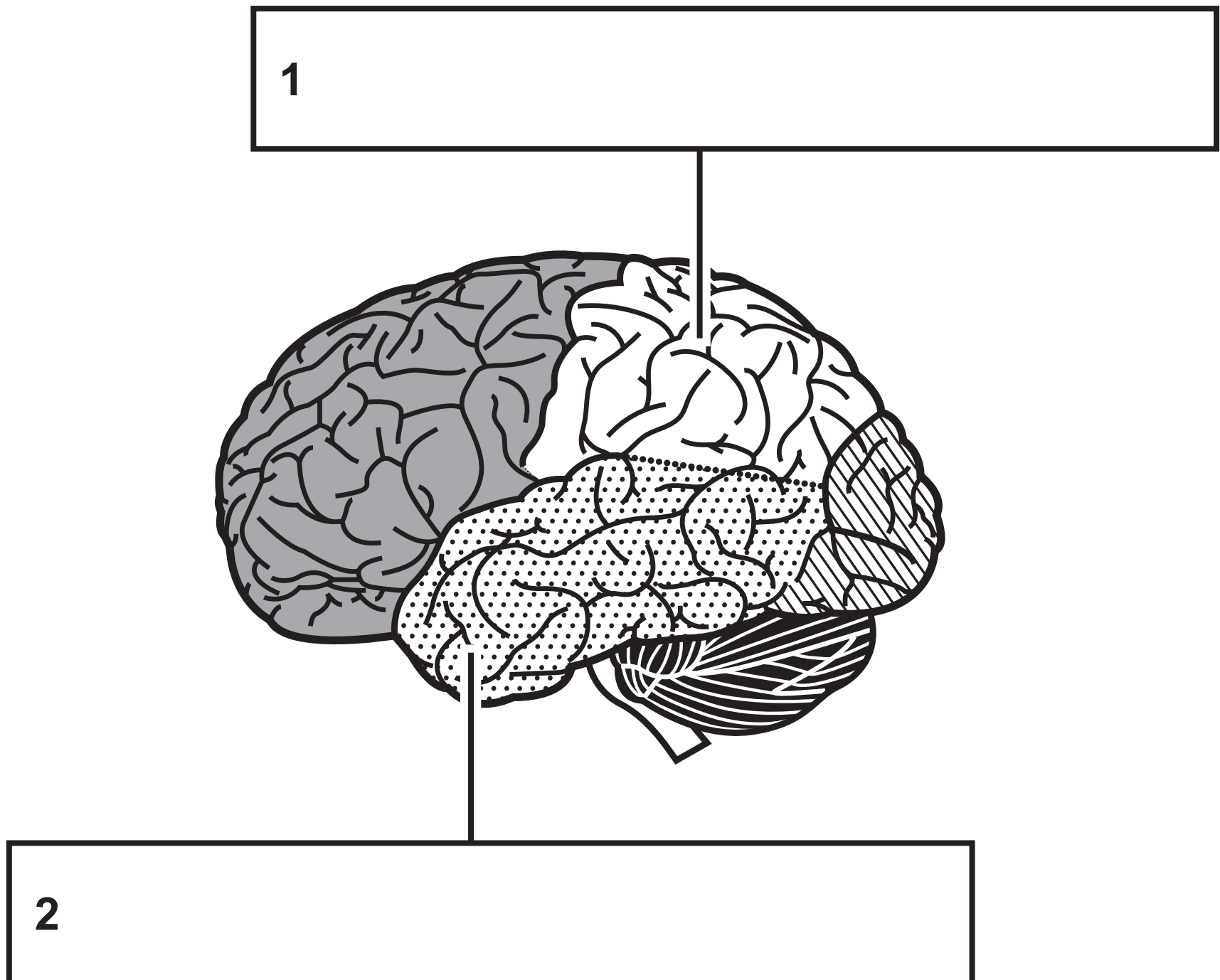
TABLE 3

<b>Group</b>	<b>Average rating of how convinced they were of CBT helping with their depression (1–10)</b>	<b>Average likelihood of attending CBT after reading the information article (1–10)</b>
<b>Group 1: patients given an information article that included a case study</b>	<b>8·7</b>	<b>7·0</b>
<b>Group 2: patients given an information article that included research evidence</b>	<b>6·5</b>	<b>7·1</b>



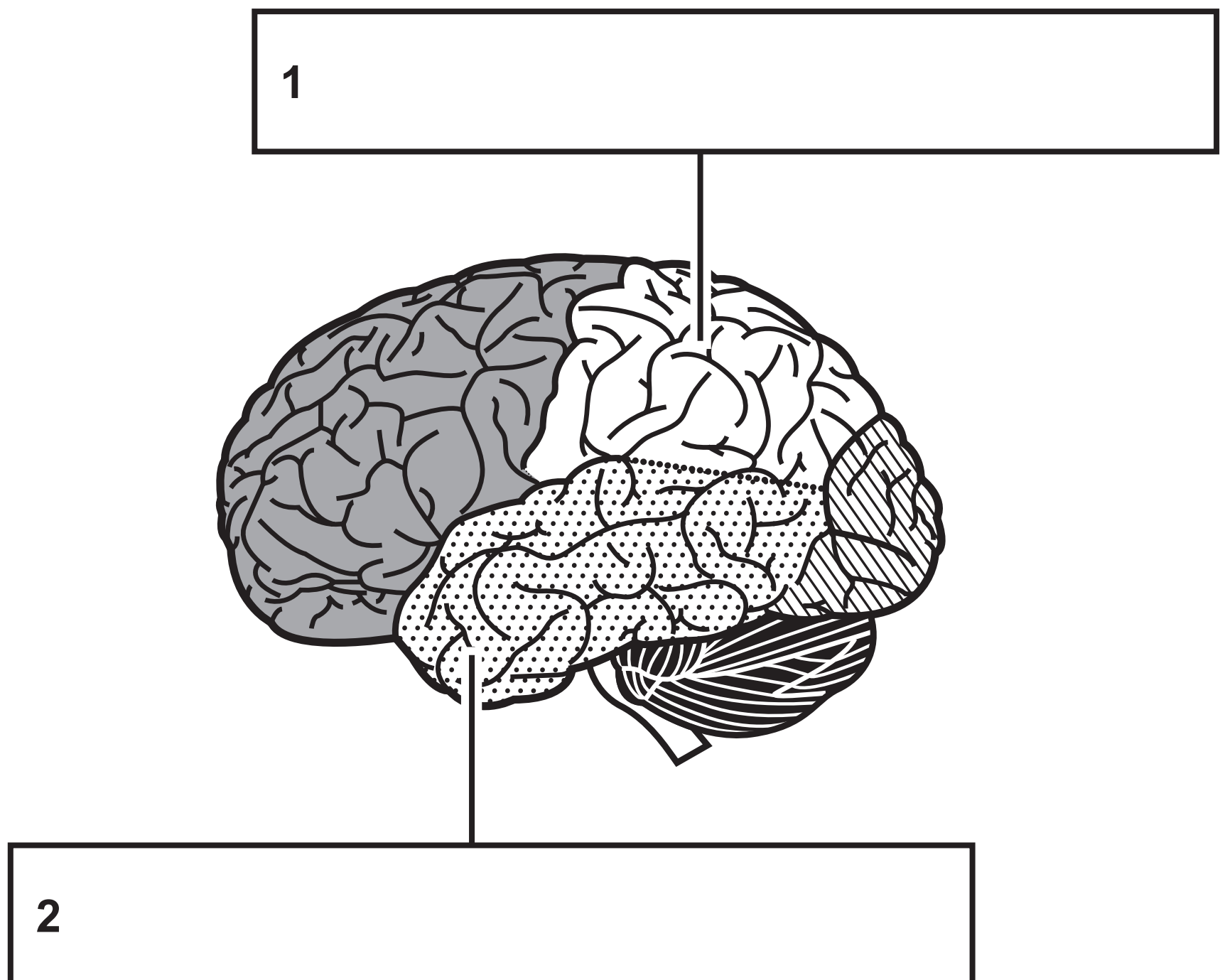
## Question 17

FIGURE 4



## Question 17

FIGURE 4



## Question 20

FIGURE 5

A bar chart to show the percentage (%) of brain-damaged patients who were able to name the three images correctly

Percentage (%) of patients who named the image correctly

